


Name: _____

Date: _____

CHAPTER
3

Ways to Add

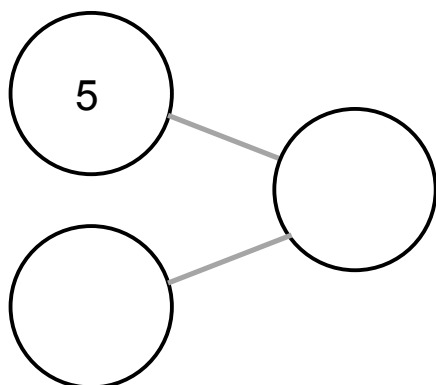

1. Show 3 more than 5.



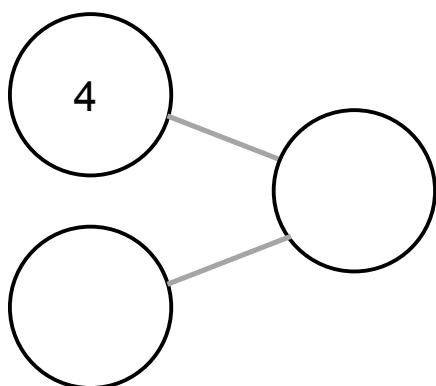
Write the addition sentence.

$$\boxed{} + \boxed{} = \boxed{}$$

2. How many balls are there in all?



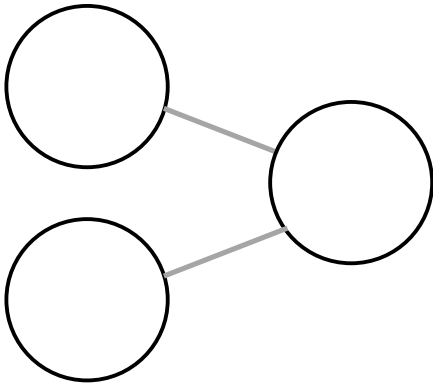


$$5 + \boxed{} = \boxed{}$$



$$4 + \boxed{} = \boxed{}$$

$$5 + \boxed{} = 4 + \boxed{}$$

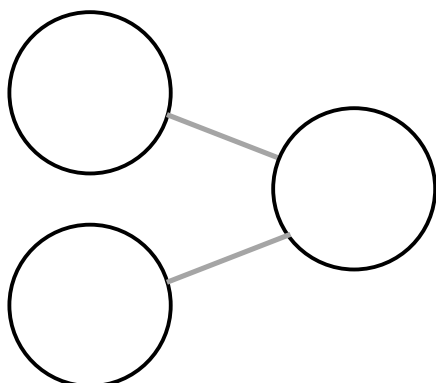
3. How many dolls are there in all?



$$\boxed{} + \boxed{} = \boxed{}$$

There are dolls in all.

4. Jason has 6 red apples and 4 green apples.
How many does he have in all?



$$\boxed{} + \boxed{} = \boxed{}$$

Jason has apples in all.